

Name \_\_\_\_\_

Date \_\_\_\_\_  
(Answer ID # 0230878)

## Mixed Review

**Add and subtract.**

1	12	7	5	2.	9	18
· -	7 +	5 +	7	+	9 -	9
<hr/>				<hr/>		
3.	16	8	4	9	17	17
-	8 +	8	· +	8 -	9 -	8
<hr/>				<hr/>		

**Order each group of numbers from largest to smallest.**

5.	15, 11, 20	____, _____, _____
6.	18, 19, 14	____, _____, _____
7.	21, 13, 12	____, _____, _____

**Write the sum.**

8	3	9	1	1	9	1	7	1	0
· +	2	· +	1	0. +	1	1. +	2	2. +	3
<hr/>		<hr/>		<hr/>		<hr/>		<hr/>	

**Circle the smaller number in each set.**

13.	3 tens and 6 ones	4 tens and 5 ones	14.	1 ten and 9 ones	2 tens and 4 ones
15.	1 ten and 1 one	27	16.	38	4 tens and 0 ones

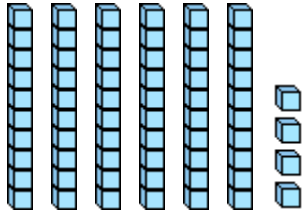
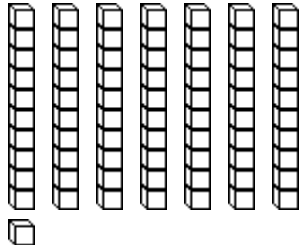
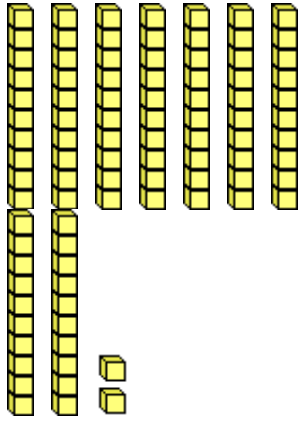
**Circle the smaller number.**

17.	90	0	18.	56	27	19.	55	77
20.	48	33	21.	53	20	22.	16	42

**Circle the correct words.**

23.	0	is equal to is greater than	0	24.	5	is less than is greater than	4
25.	7	is greater than is less than	8	26.	3	is less than is equal to	10

**Count and then write the tens and ones.**

<p>27.</p>  <p>___ tens    ___ ones</p> <p>Write the number: _____</p>	<p>28.</p>  <p>___ tens    ___ one</p> <p>Write the number: _____</p>	<p>29.</p>  <p>___ tens    ___ ones</p> <p>Write the number: _____</p>
---	--	---

**Answer Key 0230878**

**Add and subtract.**

$\begin{array}{r} 1 \quad 12 \quad 7 \quad 5 \\ \cdot - \quad 7 + \quad 5 + \quad 7 \\ \hline \quad \quad \quad \mathbf{5} \quad \quad \mathbf{12} \quad \quad \mathbf{12} \end{array}$	$\begin{array}{r} 2 \quad 9 \quad 18 \\ \cdot + \quad 9 - \quad 9 \\ \hline \quad \quad \quad \mathbf{18} \quad \quad \quad \mathbf{9} \end{array}$
$\begin{array}{r} 3 \quad 16 \quad 8 \\ \cdot - \quad 8 + \quad 8 \\ \hline \quad \quad \quad \mathbf{8} \quad \quad \quad \mathbf{16} \end{array}$	$\begin{array}{r} 4 \quad 9 \quad 17 \quad 17 \\ \cdot + \quad 8 - \quad 9 - \quad 8 \\ \hline \quad \quad \quad \mathbf{17} \quad \quad \quad \mathbf{8} \quad \quad \quad \mathbf{9} \end{array}$

**Order each group of numbers from largest to smallest.**

5. 15, 11, 20	<u><b>20</b></u> , <u><b>15</b></u> , <u><b>11</b></u>
6. 18, 19, 14	<u><b>19</b></u> , <u><b>18</b></u> , <u><b>14</b></u>
7. 21, 13, 12	<u><b>21</b></u> , <u><b>13</b></u> , <u><b>12</b></u>

**Write the sum.**

$\begin{array}{r} 8 \quad 3 \\ \cdot + \quad 2 \\ \hline \quad \quad \quad \mathbf{5} \end{array}$	$\begin{array}{r} 9 \quad 1 \\ \cdot + \quad 1 \\ \hline \quad \quad \quad \mathbf{2} \end{array}$	$\begin{array}{r} 1 \quad 9 \\ 0 \cdot + \quad 1 \\ \hline \quad \quad \quad \mathbf{10} \end{array}$	$\begin{array}{r} 1 \quad 7 \\ 1 \cdot + \quad 2 \\ \hline \quad \quad \quad \mathbf{9} \end{array}$	$\begin{array}{r} 1 \quad 0 \\ 2 \cdot + \quad 3 \\ \hline \quad \quad \quad \mathbf{3} \end{array}$
--	--	---	--	--

**Answer Key 0230878**

Circle the smaller number in each set.

13. 3 tens and 6 ones <b>3 tens and 6 ones</b>	4 tens and 5 ones <b>1 ten and 9 ones</b>
15. 1 ten and 1 one <b>1 ten and 1 one</b>	16. 38 <b>38</b>

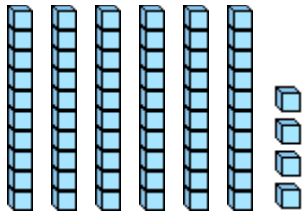
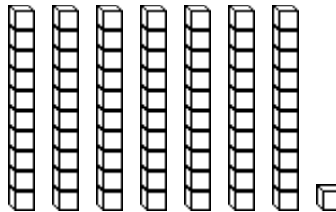
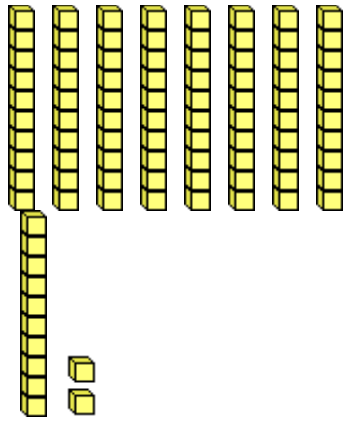
Circle the smaller number.

17. 90 <b>0</b>	18. 56 <b>27</b>	19. 55 <b>55</b>	27 77
20. 48 <b>33</b>	21. 53 <b>20</b>	22. 16 <b>16</b>	20 42

Circle the correct words.

23. 0 is equal to 0 is greater than <b>is equal to</b>	24. 5 is less than 4 is greater than <b>is greater than</b>
25. 7 is greater than 8 is less than <b>is less than</b>	26. 3 is less than 10 is equal to <b>is less than</b>

Count and then write the tens and ones.

27.  <b>6 tens      4 ones</b>  Write the number: <b>64</b>	28.  <b>7 tens      1 one</b>  Write the number: <b>71</b>	29.  <b>9 tens      2 ones</b>
---	--	--

		Write the number: <b>92</b>
--	--	--------------------------------